

MODERN CHILD PUBLIC SCHOOL
HOLIDAYS HOMEWORK
CLASS -II

ENGLISH

- Learn (R) chapter- 14 ,15,16
- Grammar chapter- 13,14,17,18
- Do the assignment in your notebook

ASSIGNMENT-1

1. Circle the correct word-

- He has /have a car.
- I has/ have a pet dog.
- Grandma has / have a bicycle .
- Giraffes has/ have long necks.

2. Use the words in the brackets to answer the questions . One has been done for you .

- Does the girl understand English? (Yes)

Yes, she does .

- Do you like bananas? (Yes)

- Do Annie and Sam have a pet dog ? (No)

3. Write the meaning of the following words from word path.

- Store-
- Reached-

Assignment -2

1. Look at these pictures of actions that happened some time ago . Fill in the blanks with suitable action.

- She _____ the television.



- I _____ a letter .



- He _____ food an hour ago.



- She _____ in her bed last night.



2. Write the short forms .

- It will be sunny tomorrow.

- I will not be late.

3. Write the meaning of the following words from word path.

- Tiny-

b. Feast-

2. Write 10 lines how you spent your holidays and paste photos.

HINDI-

1. प्रतिदिन एक पेज सुलेख लिखो।
2. निम्नलिखित शब्दों के वर्ण विच्छेद कीजिए।
 1. किताब
 2. छिपकली
 3. नौकरी
 4. ढक्कन
 5. श्रावण
3. पाठ 13, 14, 15, 16 का अभ्यास कीजिए।
4. हिंदी वर्कबुक पूर्ण करो।
5. एक पेज लगाए और प्रतिदिन उसकी देखभाल करे। पेज हमारे लिए क्यों जरूरी है इस पर एक अनुच्छेद लिखिए।

MATHS

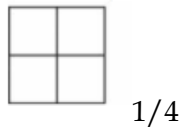
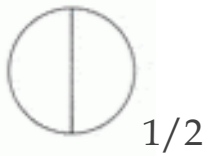
Do the given assignment in your notebook.

Q1. Divide the following with repeated subtraction

a. $28 \div 7$

b. $45 \div 9$

Q2. Colour the figure according to the fraction mentioned



Q3. A fraction is a part of a _____ .

Q4. Add and write the total amount

₹ 50 + ₹ 10 + 50p =

25p + 30p + 10p =

Q5. Write the given amount in short form

a. 30 rupees =

b. 2 rupees 25 paise =

Q6. Rani bought 500m of wool to make a sweater. She used 314m of wool. How much wool is left behind?

Q7. Subtract 37 L 355ml from 94L 700ml

Q8. Convert into grams



a. 8kg =

b. 2kg =

Q9. A shopkeeper has 35kg 450g of rice. Out of which he sold 16kg 275g of rice. How much rice is left with the shopkeeper now?

Q10. Children are having a fruit party. They are eating their favourite fruits. Complete the table and fill in the blanks.



Fruits				
Number of Children				LearnCBSE.in

- A. How many children are there in the picture? ____
- B. Number of children who like apples is _____.
- C. Most liked fruit is _____.
- D. Least liked fruit is _____.
- E. Number of children who like guava is _____ (more than/less than/equal to) the number of children who like apple.

EVS

- LEARN CHAPTERS - 16 ,17 , 19 , 20 , 21
- Also learn and write keywords of these chapters.

xxxxxxxxxx